

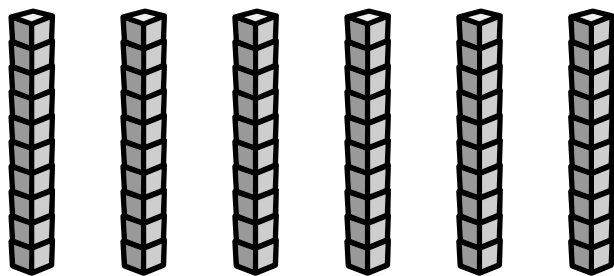


Don't Block Down


Activity Sheet

Name: _____ Class: _____


Count the blocks.
Write the correct number.



_____ blocks




Fill in the blanks.



$$6 \text{ tens} - 3 \text{ tens} = \underline{\quad\quad} \text{ tens}$$

$$60 - 30 = \underline{\quad\quad}$$


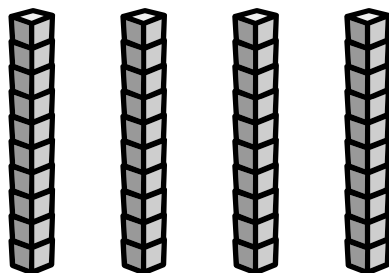
Subtract.
Use the blocks to help you.



$$7 \text{ tens} - 5 \text{ tens} = \underline{\quad\quad} \text{ tens}$$

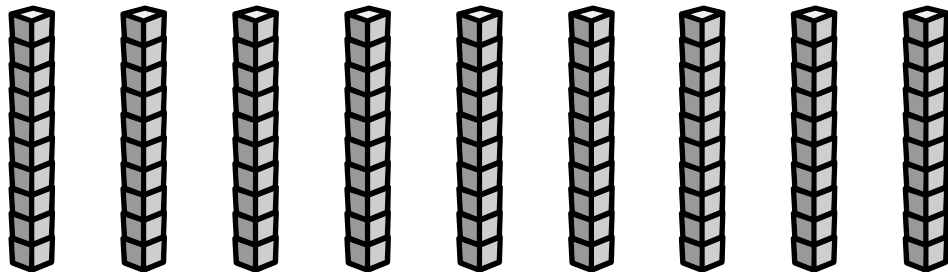
$$70 - 50 = \underline{\quad\quad}$$

Put an X on 1 ten.
Count the tens that are left.



$$\begin{array}{r} 40 \\ - 10 \\ \hline \\ \hline \end{array}$$

Put an X on 3 tens.
Count the tens that are left.



$$\begin{array}{r} 90 \\ - 30 \\ \hline \\ \hline \end{array}$$